



GOVT. OF NCT OF DELHI
Delhi Subordinate Services Selection Board
FC-18, Institutional Area, Karkardooma, Delhi - 110092.
www.dsssb.delhigovt.nic.in

exampundit
Your Success Partner
www.exampundit.in pdf.exampundit.in

Participant ID	exampundit
Participant Name	www.exampundit.in pdf.exampundit.in
Test Center Name	iON Digital Zone iDZ 2 Sector 62
Test Date	25/08/2019
Test Time	8:30 AM - 10:30 AM
Subject	LOWER DIVISION CLERK

Section : Mental Ability1

Q.1 Select the term that will come next in the following series.

A1, D4, I9, P16, Y25, J36, _____

- Ans
- 1. X49
 - 2. V49
 - 3. U49
 - 4. W49

Question ID : 5459279497

Q.2 Select the term that will come next in the following series.

ABC, FGH, KLM, PQR, _____

- Ans
- 1. TUW
 - 2. VWX
 - 3. UVW
 - 4. TUV

Question ID : 5459279495

Q.3 Select the term that will come next in the following series.

A, B, F, O, E, _____

- Ans
- 1. E
 - 2. F
 - 3. D
 - 4. C

Question ID : 5459279496

Q.4 Select the set of words that are analogous to the given set of words.

Drawer : Wardrobe : Room

Ans

- 1. Thread : Needle : Machine
- 2. CD: Floppy : Drive
- 3. Lace : Left Shoe : Right Shoe
- 4. Spoon : Fork : Knife

Question ID : 5459279500

Q.5 If in a certain code, BROOM is coded as EURRP, then how is EURRP coded?

- Ans
- 1. HXVVS
 - 2. GXUUS
 - 3. HXUUS
 - 4. HXUUR

Question ID : 5459279505

Q.6 In the given options 3 pair of words are similarly related and one pair is differently related. Find the pair which is differently related.

- Ans
- 1. Bat: Ball
 - 2. Disk: Floppy
 - 3. Cup: Saucer
 - 4. Remote: Battery

Question ID : 5459279499

Q.7 A, B, C, D, E and F are 6 people in a meeting. A and D are from Chennai while the others are from Mumbai. B and D are tall while the others are short. B, C and E are males while A, D and F are females. Who is the tall male from Mumbai?

- Ans
- 1. C
 - 2. A
 - 3. D
 - 4. B

Question ID : 5459279509

Q.8 A woman says to another, you are the daughter of my husband' brother's mother's husband. How are the women related?

- Ans
- 1. Aunt
 - 2. Daughter
 - 3. Sister-in-law
 - 4. Sister

Question ID : 5459279511

Q.9 Find the pair of words that is analogous to the given pair.

Tea : Coffee

- Ans
- 1. Doctor: Medicine
 - 2. Laptop: Tablet

3. Bat: Ball

4. Door: Key

Question ID : 5459279501

Q.10 Six people are sitting in a garden with 3 of them facing the other 3. A is sitting to the north of B whereas B is to the immediate west of C. E sits across F who sits to the east of C. In what direction does D sit with respect to C?

Ans 1. South

2. South-West

3. North-East

4. North

Question ID : 5459279510

Q.11 X remembers that his mother's birthday falls after August 8th but before August 20th. His sister, Y, remembers that her mother's birthday is after 18th August but before August 28th. When is the mother's birthday?

Ans 1. 43696

2. 43697

3. 43695

4. 43698

Question ID : 5459279507

Q.12 Select the set of words that are analogous to the given set of words.

Tea : Milk : Sugar

Ans 1. Milk : Sugar : Water

2. Maths : Hindi : English

3. Class : Cycles : Students

4. Story : Characters : Plots

Question ID : 5459279503

Q.13 If CAT = 60, DART = 1440, then how much is BART equal to?

Ans 1. 480

2. 540

3. 720

4. 360

Question ID : 5459279506

Q.14 According to the examination results of a class, X ranked 11th from the top and 30th from the bottom amongst those who passed the examination. 6 students did not give the examination whereas 4 failed in it. How many students are there in the class?

Ans 1. 49

2. 51

3. 50

 4. 52

Question ID : 5459279508

Q.15 The statements below are followed by two conclusions labelled I and II . Assuming that the information in the statements is true, even if it appears to be at variance with reality, decide which conclusion(s) logically and definitely follow(s) from the information given in the statements.

Statements:





All pencils are pens.

Some erasers are pencils.

Conclusions:

I. Some erasers are pens.





II. Some pens are erasers.

- Ans
-  1. Only conclusion II follows.
 -  2. Neither conclusion I or II follows.
 -  3. Both conclusions I and II follow.
 -  4. Only conclusion I follows.

Question ID : 5459279512

Q.16 Which of the given options can be a part of the group to which the given words belong?

Nokia, Samsung, Apple

- Ans
-  1. OnePlus
 -  2. MacBook
 -  3. iPad
 -  4. Galaxy





Question ID : 5459279502

Q.17 Out of the given options, three are similar in a certain manner. However, one option is NOT like the other three. Select the option which is different from the rest.

- Ans
-  1. Stumps
 -  2. Player
 -  3. Ball
 -  4. Bat

Question ID : 5459279498

Q.18 In a coding system, 1357 is coded as 2468. In the same system, how is 2468 coded as?

- Ans
-  1. 3579
 -  2. 9357
 -  3. 3571
 -  4. 1357

Question ID : 5459279504

Q.19 Which two signs should be interchanged to make the below equation mathematically correct?

$$18 \times 6 \div 9 + 3 - 25 = 5$$

- Ans
- 1. \times, \div
 - 2. $\div, +$
 - 3. $+, \div$
 - 4. $\times, +$

Question ID : 5459279514

Q.20 The statements below are followed by two assumptions labelled I and II . Assuming that the information in the statements is true, even if it appears to be at variance with reality, decide which assumption(s) logically and definitely valid from the information given in the statements.

Statements:

Some water is polluted.
Pollution is caused by dirt.

Assumptions:

I. People throw dirt in the water.
II. Factories release dirt in the water.

- Ans
- 1. Neither assumptions are valid
 - 2. Only assumption I is valid
 - 3. Both assumptions are valid
 - 4. Only assumption II is valid

Question ID : 5459279513

Section : Mental Ability2

Q.1 Out of the given options, three are similar in a certain manner. However, one option is NOT like the other three. Select the option which is different from the rest.

- Ans
- 1. 125
 - 2. 216
 - 3. 343
 - 4. 8

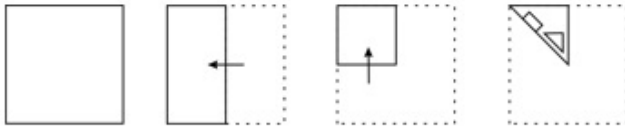
Question ID : 5459279517

Q.2 Out of the given number pairs, three are similar in a certain manner. However, one pair is NOT like the other three. Select the pair which is different from the rest.

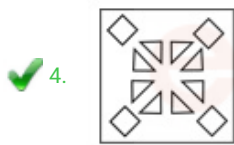
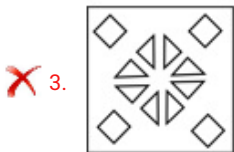
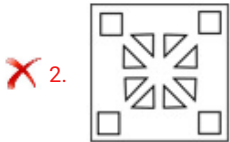
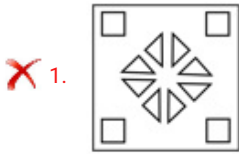
- Ans
- 1. 0.39375
 - 2. 49:280
 - 3. 64:512
 - 4. 25:125

Question ID : 5459279519

Q.3 A piece of paper is folded and punched as shown below in the question figures. From the given answer figures, indicate how it will appear when opened.



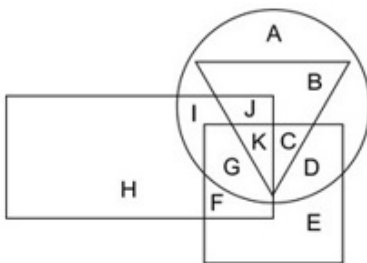
Ans



www.exampundit.in **exampundit** Your Success Partner
 www.exampundit.in

Question ID : 5459279533

Q.4 In the following figure, triangle represents chef, square represents fathers, circle represents poets and rectangle represents Americans. Which set of letters represents fathers who are poets?



- Ans
- ✗ 1. IJKG
 - ✗ 2. FGK
 - ✗ 3. JBKC
 - ✓ 4. GKCD

Question ID : 5459279524

Q.5 Choose the option that can appropriately replace the '?'.

$$3^3 + 4^3 + 5^3 ? 6^3$$

- Ans
- 1. <
 - 2. >
 - 3. <>
 - 4. =

Question ID : 5459279522

Q.6 A man walks 50 m North, 30 m East and 50 m South. Lastly he walks 20 m West. In which direction is he from the starting point?

- Ans
- 1. North-East
 - 2. South-West
 - 3. East
 - 4. North

Question ID : 5459279526

Q.7 Find the set of numbers that is similar to the given set.

(5, 25, 75)

- Ans
- 1. (8, 64, 96)
 - 2. (4, 16, 48)
 - 3. (8, 32, 64)
 - 4. (4, 16, 64)

Question ID : 5459279521

Q.8 Complete the following number series?

10000, 2000, 800, 480, 384, 384, _____

- Ans
- 1. 460.8
 - 2. 450.8
 - 3. 440.8
 - 4. 484

Question ID : 5459279515

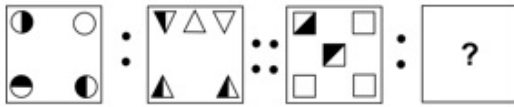
Q.9 Find the incorrect term in the following series:

10, 10, 10, 20, 60, 240, 2400, 31200

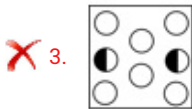
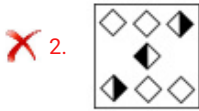
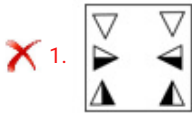
- Ans
- 1. 240
 - 2. 31200
 - 3. 60
 - 4. 20

Question ID : 5459279518

Q.10 Select the image that is related to the third image on the same basis as the second image is related to the first image.

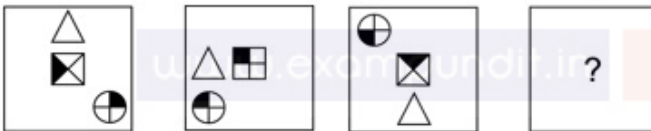


Ans

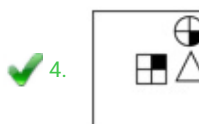
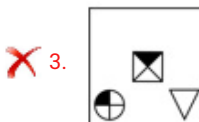
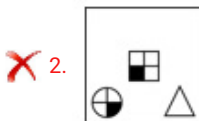


Question ID : 5459279529

Q.11 Choose the option which completes the series given in the question figure.



Ans



Question ID : 5459279528

Q.12 In search of a treasure, a man roams around on an island. He starts by walking East for 8

kms and then goes South for 6 kms. There he finds the treasure and wants to go back to his starting point. What is the shortest distance he should cover to reach the starting point?

- Ans
- 1. 6 km
 - 2. 14 km
 - 3. 8 km
 - 4. 10 km

Question ID : 5459279527

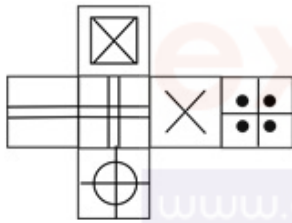
Q.13 Choose the option that relates to the third term in the same way as the second term relates to the first term.

21 : 28 :: 42 : ?

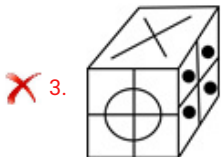
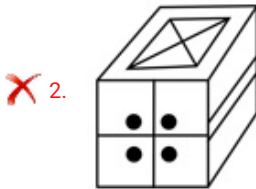
- Ans
- 1. 35
 - 2. 49
 - 3. 63
 - 4. 56

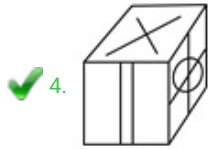
Question ID : 5459279520

Q.14 Which of the following cubes in the answer figure CANNOT be made based on the unfolded cube in the question figure?



Ans

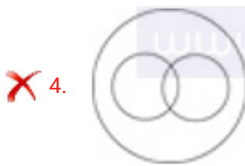
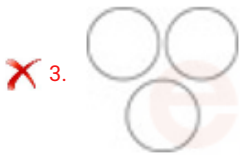
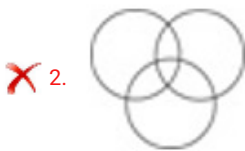




Question ID : 5459279531

Q.15 Which of the following Venn diagrams best represents the relationship between Rose, flowers and Lily?

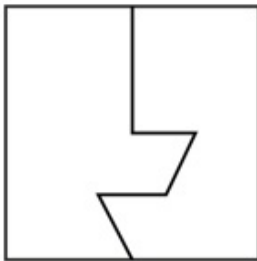
Ans



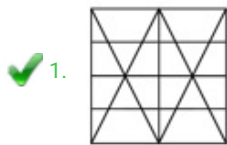
exampundit
Your Success Partner
www.exampundit.in pdf.exampundit.in

Question ID : 5459279525


Q.16 From the given answer figures, select the one in which the question figure is hidden/embedded.



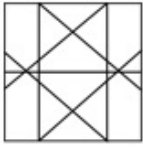
Ans



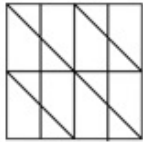
2.



3.



4.



Question ID : 5459279532

Q.17 What is the minimum number of straight lines required to draw the given figure?



Ans 1. 10

2. 12

3. 9

4. 11

Question ID : 5459279534

Q.18 Which of the numbers should be interchanged so as to make the equation correct?

$$49 \times 7 \div 14 + 25 - 27 = 0$$

Ans 1. 27, 14

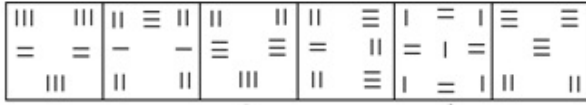
2. 14, 49

3. 25, 49

4. 25, 27

Question ID : 5459279516

Q.19 A figure series of 6 parts is given. Out these 4 parts are labelled A,B, C and D. One of these 4 parts is incorrect. Find the incorrect part.



a b c d

- Ans 1. A
 2. B
 3. D
 4. C

Question ID : 5459279530

Q.20 Find the missing term in the following series:

2, 4, 12, ?, 240, 1440, 10080

- Ans 1. 48
 2. 30
 3. 54
 4. 36

Question ID : 5459279523

Section : General Awareness1

Q.1 Who presented the Interim Budget of 2019-20?

- Ans 1. Amit Shah
 2. Shanmukham Chetty
 3. Piyush Goyal
 4. Arun Jaitley

Question ID : 5459279541

Q.2 At the district level, _____ Committee has been constituted to monitor Swachh Bharat mission (Urban) activities.

- Ans 1. District Project Management
 2. District High Powered
 3. Designated Urban Local
 4. District Level Review and Monitoring

Question ID : 5459279544

Q.3 Who is called the "Father of Green Revolution in India"?

- Ans 1. Jawaharlal Nehru
 2. Vikram Sarabhai
 3. Bal Gangadhar Tilak
 4. Mankombu Sambasivan Swaminathan

Question ID : 5459279554

Q.4 Fusion of two gametes dissimilar in size, as in some species of Chlamydomonas is termed as _____.

- Ans
- 1. anisogamous
 - 2. isogamous
 - 3. zoospores
 - 4. oogamous

Question ID : 5459279547

Q.5 Hornbill festival is celebrated from _____.

- Ans
- 1. 15th November
 - 2. 12th December
 - 3. 1st November
 - 4. 1st December

Question ID : 5459279538

Q.6 _____ is a song used to mourn the death of the loved ones.

- Ans
- 1. Banvarh
 - 2. Mando
 - 3. Fughri
 - 4. Deknni

Question ID : 5459279536

Q.7 Mahabalipuram Rathas is situated along the shores of the _____.

- Ans
- 1. Bay of Bengal
 - 2. Atlantic Ocean
 - 3. Indian Ocean
 - 4. Arabian Sea

Question ID : 5459279537

Q.8 Which among the following soils requires least use of fertilisers?

- Ans
- 1. Laterite Soil
 - 2. Black Soil
 - 3. Alluvial Soil
 - 4. Red Soil

Question ID : 5459279552

Q.9 The layer of very rare air above the mesosphere is called the _____.

- Ans
- 1. troposphere
 - 2. stratosphere

- 3. exosphere
- 4. thermosphere

Question ID : 5459279545

Q.10 _____ is a non-prescription drug used for relief from acid indigestion and heartburn.

- Ans
- 1. Sodium Carbonate
 - 2. Calcium Carbonate
 - 3. Aspirin
 - 4. Sodium Chloride

Question ID : 5459279543

Q.11 Keisabadi is a popular dance form of _____.

- Ans
- 1. Kerala
 - 2. Gujarat
 - 3. Maharashtra
 - 4. Odisha

Question ID : 5459279535

Q.12 The present capital of Burma is _____.

- Ans
- 1. Naypyidaw
 - 2. Kathmandu
 - 3. Dhaka
 - 4. Thimphu

Question ID : 5459279553

Q.13 The SI unit of electric current is _____.

- Ans
- 1. candela
 - 2. kelvin
 - 3. ampere
 - 4. mole

Question ID : 5459279542

Q.14 Which among the following is not an infectious viral disease?

- Ans
- 1. Mumps
 - 2. Influenza
 - 3. Typhoid
 - 4. Dengue

Question ID : 5459279549

Q.15 Godavari river originates from _____ state.

- Ans
- 1. Himachal Pradesh

- 2. Maharashtra
- 3. Karnataka
- 4. Madhya Pradesh

Question ID : 5459279551

Q.16 _____ measures the market value of all final goods and services produced by a country's citizens or residents.

- Ans
- 1. Net Domestic Product
 - 2. Gross Domestic Product
 - 3. Gross National Product
 - 4. Net National Product

Question ID : 5459279539

Q.17 _____ is a water purification method that utilizes heat to collect pure water in the form of vapour.

- Ans
- 1. Distillation
 - 2. Filtration
 - 3. Chlorination
 - 4. Boiling

Question ID : 5459279548

Q.18 _____ is the largest concrete gravity dam in Kerala.

- Ans
- 1. Krishnarajasagar Dam
 - 2. Indira Sagar Dam
 - 3. Mettur Dam
 - 4. Cheruthoni Dam

Question ID : 5459279550

Q.19 CAR stands for _____.

- Ans
- 1. Credit Adequacy ratio
 - 2. Capital Adequacy Ratio
 - 3. Core Adequacy Ratio
 - 4. Cash Adequacy Ratio

Question ID : 5459279540

Q.20 Taenia is an example of _____ phylum.

- Ans
- 1. Coelenterata
 - 2. Porifera
 - 3. Platyhelminthes
 - 4. Ctenophora

Question ID : 5459279546

Section : General Awareness2

Q.1 Who is the first Indian sprinter to win gold medal in women's 100m in World Universiade, 30th Summer University Games?

- Ans
- 1. Suresh Sathya
 - 2. Jata Shankar
 - 3. Anand Shetty
 - 4. Dutee Chand

Question ID : 5459279573

Q.2 Balwant Moreshwar Purandare received Padma Vibhushan in 1919 for his contribution in the field of _____.

- Ans
- 1. Art-Vocals-Folk
 - 2. Art-Acting-Theatre
 - 3. Public Affairs
 - 4. Trade & Industry-Infrastructure

Question ID : 5459279567

Q.3 Ibrahim Lodi, the last Lodhi ruler, was defeated by _____.

- Ans
- 1. Jahangir
 - 2. Babur
 - 3. Iltutmish
 - 4. Humayun

Question ID : 5459279559

Q.4 _____ of the Indian Constitution talks about the fundamental rights.

- Ans
- 1. Part I
 - 2. Part III
 - 3. Part IV
 - 4. Part VI

Question ID : 5459279568

Q.5 Guru Shikhar, the highest point of Rajasthan, lies on the _____.

- Ans
- 1. Eastern Ghats
 - 2. Western Ghats
 - 3. Aravalli Range
 - 4. Karakoram Range

Question ID : 5459279555

Q.6 Who was the first woman president of Indian National Congress?

- Ans
- 1. Annie Besant

- 2. Sonia Gandhi
- 3. Indira Gandhi
- 4. Sarojini Naidu

Question ID : 5459279557

Q.7 _____ won the Grammy Award 2019 for the best pop vocal album.

- Ans
- 1. David Byrne
 - 2. Tony Bennett
 - 3. Shawn Mendes
 - 4. Ariana Grande

Question ID : 5459279566

Q.8 Which among the following is not a Fundamental Right?

- Ans
- 1. Right to Equality
 - 2. Right against Exploitation
 - 3. Right to Freedom
 - 4. Right against Criminal Injustice

Question ID : 5459279569

Q.9 The headquarters of Food and Agricultural Organisation is located in _____.

- Ans
- 1. London
 - 2. New York
 - 3. Paris
 - 4. Rome

Question ID : 5459279563

Q.10 People were gathered at Jallianwala Bagh in Amritsar to protest against arrest on Saifuddin Kitchlew and Satyapal on _____.

- Ans
- 1. 13th April 1919
 - 2. 16th May 1921
 - 3. 12th May 1918
 - 4. 15th April 1920

Question ID : 5459279556

Q.11 According to which Article of the Indian Constitution states that the State shall endeavour to secure for the citizens a uniform civil code throughout the territory of India?

- Ans
- 1. Article 55
 - 2. Article 40
 - 3. Article 52
 - 4. Article 44

Question ID : 5459279571

Q.12 Which among the following Indian boxer is nicknamed 'Ahir boxer'?

- Ans
- 1. Akhil Kumar
 - 2. Shiva Thapa
 - 3. Vijender Singh
 - 4. Vaibhav Yadav

Question ID : 5459279574

Q.13 Woomera, rocket launch station, is located in _____.

- Ans
- 1. China
 - 2. Australia
 - 3. Russia
 - 4. Iraq

Question ID : 5459279564

Q.14 Who was the founder of Utpala dynasty?

- Ans
- 1. Gopalavarman
 - 2. Alakhana
 - 3. Avantivarman
 - 4. Sankaravarman

Question ID : 5459279558

Q.15 The Indian pair of G. Sathiyan and _____ won bronze in Men's Doubles at World Tour Platinum Australian Open Table Tennis 2019.

- Ans
- 1. Soumyajit Ghosh
 - 2. Anthony Amalraj
 - 3. Achanta Sharath Kamal
 - 4. Srikanth Kidambi

Question ID : 5459279572

Q.16 _____, popularly known as 'Ali Gauhar', was defeated in the Battle of Buxar.

- Ans
- 1. Bahadur Shah II
 - 2. Shah Alam I
 - 3. Akbar II
 - 4. Shah Alam II

Question ID : 5459279561

Q.17 Who among the following Mughal Emperors built Moti Masjid?

- Ans
- 1. Shah Jahan
 - 2. Akbar
 - 3. Humayun
 - 4. Babur

Question ID : 5459279560

Q.18 Vijay Ghat is the memorial of _____.

- Ans
- 1. Lal Bahadur Shastri
 - 2. Indira Gandhi
 - 3. Jawaharlal Nehru
 - 4. Mahatma Gandhi

Question ID : 5459279565

Q.19 Which among the following books were not written by Rabindranath Tagore?

- Ans
- 1. The Post Office
 - 2. Gardener
 - 3. Magic Seeds
 - 4. Gora

Question ID : 5459279562

Q.20 The constituent assembly adopted the national song on _____.

- Ans
- 1. July 22, 1950
 - 2. March 25, 1951
 - 3. Jan 25, 1952
 - 4. Jan 24, 1950

Question ID : 5459279570

Section : Arithmetic Ability1

Q.1 4 bikes can be bought at the same price instead of 3 cars. If the total price of 7 bikes and 5 cars is Rs 4100000, then what is the price of a bike?

- Ans
- 1. Rs 240000
 - 2. Rs 60000
 - 3. Rs 120000
 - 4. Rs 300000

Question ID : 5459279582

Q.2 A car has to cover 125 kms in 5 hours. What will be the average speed of the car if it has covered 90 kms in the first 3 hours?

- Ans
- 1. 28 km/h
 - 2. 20 km/h
 - 3. 25 km/h
 - 4. 24 km/h

Question ID : 5459279586

Q.3 A building has 2 elevators. X gets on one of them and Y on another. X takes the elevator from the 2nd floor which goes up at 15 floors a minute. Y takes the elevator from 107th floor which comes down at 20 floor a minute. At which floor do X and Y meet?

- Ans
- 1. 47
 - 2. 46
 - 3. 48
 - 4. 45

Question ID : 5459279577

Q.4 The area of a square increase by 69 percent when the side is increased. Find the increase in the side of the square.

- Ans
- 1. 27.50 percent
 - 2. 32.50 percent
 - 3. 25 percent
 - 4. 30 percent

Question ID : 5459279588

Q.5 Convert 48 decimal to binary.

- Ans
- 1. 101110
 - 2. 110000
 - 3. 101000
 - 4. 101100

Question ID : 5459279575

Q.6 X sells goods to Y at a profit of 20 percent and Y sells the same goods to Z at a profit of 50 percent. If the cost price for Z is Rs 9000, then what is the cost of the goods for X?

- Ans
- 1. Rs 5400
 - 2. Rs 4500
 - 3. Rs 5000
 - 4. Rs 4000

Question ID : 5459279587

Q.7 A gadget was bought at a discount of 25 percent on MRP and was sold for 10 percent discount on MRP. What is the profit percentage?

- Ans
- 1. 35 percent
 - 2. 30 percent
 - 3. 20 percent
 - 4. 25 percent

Question ID : 5459279592

Q.8 X bought a machine for Rs 10000 and Y bought it for 5 percent less. X sold the machine for 12000 and Y sold it for 15 percent more. How much more profit did Y make?

- Ans
- 1. Rs 2100
 - 2. Rs 2400

3. Rs 1800

4. Rs 2300

Question ID : 5459279591

Q.9 A child gets 1 random coin out of Re 1, Rs 2 and Rs 5 coins daily. He starts on 1st April and at the end of the month, he has coins in the ratio 5:4:6. Find the value of the coins with him.

Ans 1. Rs 84

2. Rs 94

3. Rs 96

4. Rs 86

Question ID : 5459279581

Q.10 What is the average of the cube root of the first 5 positive numbers having a perfect cube root?

Ans 1. 2

2. 4

3. 3.5

4. 3

Question ID : 5459279585

Q.11 Find the LCM of $\frac{4}{125}$, $\frac{7}{100}$ and $\frac{2}{25}$.

Ans 1. 1.5

2. 1.04

3. 1.12

4. 1.2

Question ID : 5459279579

Q.12 Find the proportion equivalent to M:N:O:P if M:N = 8:15, N:O = 5:9 and O:P is 18:19?

Ans 1. 16:30:51:57

2. 16:30:54:76

3. 16:28:54:57

4. 16:30:54:57

Question ID : 5459279594

Q.13 A number 727X44 is divisible by 88. Find the value of X.

Ans 1. 3

2. 4

3. 2

4. 1

Question ID : 5459279580

Q.14 What is the product of the digits of the smallest number exactly divisible by 6, 16, 22 and 28?

- Ans
- 1. 486
 - 2. 972
 - 3. 1458
 - 4. 729

Question ID : 5459279583

Q.15 A number's square multiplied by 50 is exactly divisible by 40, 45, 50 and 60. Find the minimum possible value of the number.

- Ans
- 1. 5
 - 2. 9
 - 3. 6
 - 4. 8

Question ID : 5459279584

Q.16 A school has 400 students. The annual fees was increased by 50 percent. 20 students were then offered a scholarship of 50 percent. By how much did the profits of the school increase?

- Ans
- 1. 42.75 percent
 - 2. 44.75 percent
 - 3. 46.25 percent
 - 4. 45.25 percent

Question ID : 5459279593

Q.17 What is the sum of the digits of the smallest number divisible by 4, 14, 18 and 25?

- Ans
- 1. 18
 - 2. 9
 - 3. 15
 - 4. 12

Question ID : 5459279578

Q.18 X has a basic salary of Rs 10000. He earns commission 5 percent on sales above Rs 40000. How much sales should he make to get a total pay of Rs 40000?

- Ans
- 1. Rs 560000
 - 2. Rs 600000
 - 3. Rs 640000
 - 4. Rs 720000

Question ID : 5459279589

Q.19 X scored 52 percent in a test and failed by 15 marks. Y scored 62 percent in the same test and passed by 35 marks. What is the passing score?

- Ans
- 1. 350
 - 2. 275

3. 300

4. 250

Question ID : 5459279590

Q.20 A gym has 6 different bells for 6 different exercises which ring at the end of each exercise. The duration of the exercises are 40, 45, 50, 60, 75 and 125 seconds. If the bells ring together at 9 AM, then at what time next will they ring together?

Ans 1. 11:40 AM

2. 11:30 AM

3. 10:30 AM

4. 10:45 AM

Question ID : 5459279576

Section : Arithmetic Ability2

Q.1 The line chart shows the annual food grain production (in million tonnes) for years 2012-2017. By how much has the average production in 2015-2017 has increased from the average production in 2012-2014?



Ans 1. 100 percent

2. 25 percent

3. 50 percent

4. 66.67 percent

Question ID : 5459279614

Q.2 X can type 25 words in a minute and Y can type 30 words in a minute. If an essay of 550 words is to be typed, then in how much time will both of them finish the essay while typing together?

Ans 1. $\frac{2}{5}$ hour

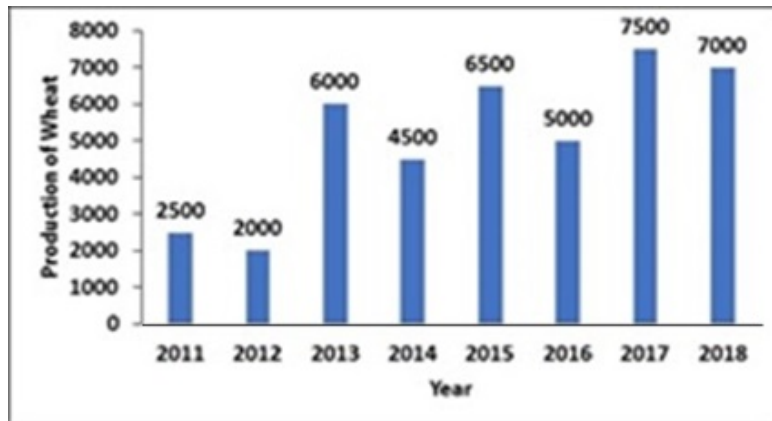
2. $\frac{1}{6}$ hour

3. $\frac{1}{3}$ hour

4. $\frac{1}{4}$ hour

Question ID : 5459279604

Q.3 The bar graph below shows the production of wheat (in tonnes) by a big farm over the years 2011-2018. In how many of the given years was the production of wheat less than the previous year if the production in the year 2010 was 3000 tonnes?



- Ans
- 1. 4
 - 2. 3
 - 3. 5
 - 4. 6

Question ID : 5459279612

Q.4 A conical figure is reformed where the radius is increased by 20 percent and the height is reduced by 20 percent. What is the change in the volume of the figure?

- Ans
- 1. 15.2 percent increase
 - 2. 20 percent increase
 - 3. 20 percent decrease
 - 4. 15.2 percent decrease

Question ID : 5459279608

Q.5 A shooter hits 2 targets at speeds of 750 km/h and 900 km/h. If the target is 100 m away, what is the ratio of the time taken to hit the target?

- Ans
- 1. 9:7
 - 2. 6:5
 - 3. 7:9
 - 4. 5:6

Question ID : 5459279600

Q.6 X can complete $\frac{1}{2}$ the task in 8 days and Y can complete $\frac{1}{4}$ th of the task in 16 days. In how many days together can they finish the task?

- Ans
- 1. 12.5
 - 2. 12.8
 - 3. 13.2
 - 4. 10.8

Question ID : 5459279605

Q.7 An investment opportunity offers 200 percent p.a. compound interest compounded

quarterly. What is the effective annual interest rate?

- Ans
- 1. 200 percent
 - 2. 506.25 percent
 - 3. 250 percent
 - 4. 406.25 percent

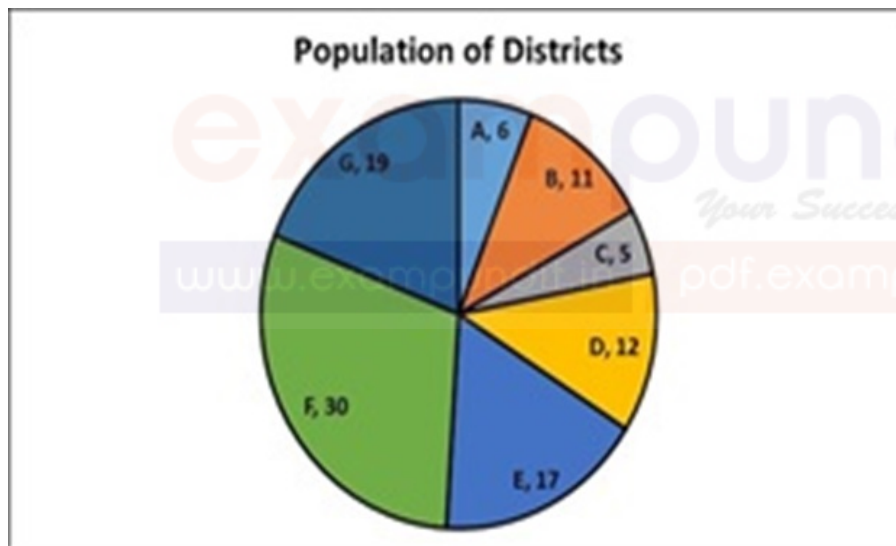
Question ID : 5459279599

Q.8 Two runners finish a 20 km marathon race in a difference of 30 mins. What is the winner's speed if their speeds differ by 2 km/h?

- Ans
- 1. 12.5 km/h
 - 2. 10 km/h
 - 3. 5 km/h
 - 4. 8 km/h

Question ID : 5459279602

Q.9 The pie chart shows the proportionate population of 7 districts. The 7 districts make up a town. If the population of Districts B, D and E add upto 80,000, then what is the total population of the other districts?

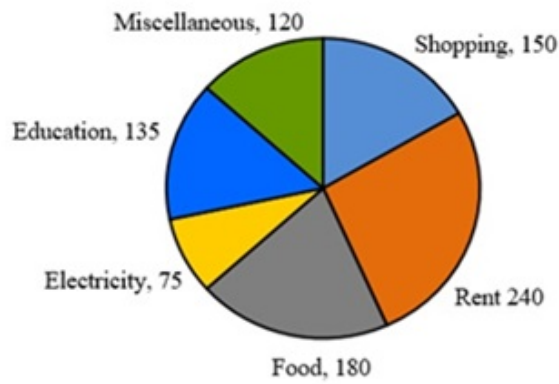


- Ans
- 1. 80000
 - 2. 120000
 - 3. 100000
 - 4. 160000

Question ID : 5459279610

Q.10 The pie chart shows the different kinds of expenses of a particular family for a month. If the amount spent on electricity is Rs 2250, then what is the difference between the amounts spent on Rent and Food? The numbers given in the pie chart are in proportion to the expenses of the family.

Expenses of a Particular Family



- Ans
- 1. Rs 2700
 - 2. Rs 2400
 - 3. Rs 1600
 - 4. Rs 1800

Question ID : 5459279609

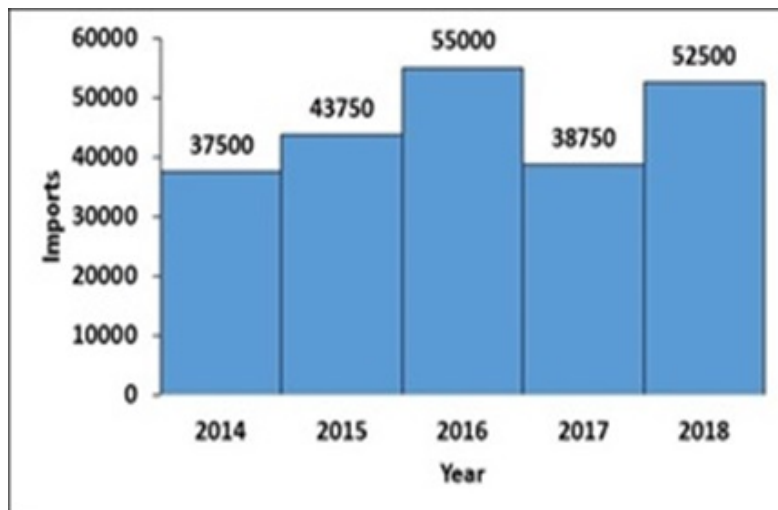
Q.11 The total surface area of a cylinder measures 2992 sq cm and the radius is 14 cm. Find the height of the cylinder.

- Ans
- 1. 20 cm
 - 2. 5 cm
 - 3. 10 cm
 - 4. 15 cm

exampundit
Your Success Partner
www.exampundit.in pdf.exomoundit.in

Question ID : 5459279606

Q.12 The following histogram shows the quantity of cement (in million kg) imported by India from 2014-2018. What is the ratio of the number of years having less than average imports to the number of years having more than average imports during the given period?



- Ans
- 1. 4:1
 - 2. 3:2
 - 3. 2:3

Q.13 The table shows the various annual expenses of a firm (in '000s of rupees) from 2002-2006. By how much is the average expenditure on Delivery is more than the average expenditure on Interest?

Year	Particulars				
	Purchases	Wages	Rent	Interest	Delivery
2002	62500	87500	100000	40000	40000
2003	75000	60000	85000	35000	45000
2004	100000	75000	90000	55000	55000
2005	110000	90000	50000	45000	55000
2006	125000	100000	70000	50000	75000

- Ans
- 1. 25 percent
 - 2. 10 percent
 - 3. 12.50 percent
 - 4. 20 percent

Q.14 A bank offers simple interest and a certain portion of the principal as bonus. A principal of Rs 25000 amounted to Rs 30000 when the interest rate was 10 percent. What was the rate of bonus?

- Ans
- 1. 20 percent
 - 2. 15 percent
 - 3. 25 percent
 - 4. 10 percent

Q.15 Find the total surface area of the cone if the radius and height of the cone measure 42 cm and 56 cm respectively.

- Ans
- 1. 14784 sq cm
 - 2. 22176 sq cm
 - 3. 11088 sq cm
 - 4. 7392 sq cm

Q.16 X, Y and Z can complete a task in 240, 300 and 360 days respectively. In how many days can the work be finished if it is started by X and he is assisted by Y and Z on every third and second day respectively?

- Ans
- 1. 132
 - 2. 144
 - 3. 120

✓ 4. 150

Question ID : 5459279603

Q.17 If $x/y = 5/8$, then what is the value of $8x/5y$?

- Ans
- ✓ 1. 1:1
 - ✗ 2. 1:2
 - ✗ 3. 1:4
 - ✗ 4. 1:5

Question ID : 5459279595

Q.18 A runner can complete a distance of 100 m in 15 seconds. If his speeds reduces by $1/5$ th, then how much distance can he cover in the next 30 seconds?

- Ans
- ✗ 1. 210 m
 - ✗ 2. 175 m
 - ✗ 3. 200 m
 - ✓ 4. 160 m

Question ID : 5459279601

Q.19 A number is 20 percent smaller than a second number. However, the second number now increases by 20 percent with no change in the first number. What is the ratio of the two numbers now?

- Ans
- ✗ 1. 3:2
 - ✗ 2. 5:3
 - ✗ 3. 3:5
 - ✓ 4. 2:3

Question ID : 5459279596

Q.20 A sum of Rs 12000 amounts to Rs 16000 in 3 years at the rate of simple interest. What is the rate of interest?

- Ans
- ✗ 1. 8.00 percent
 - ✗ 2. 9.09 percent
 - ✓ 3. 11.11 percent
 - ✗ 4. 10.00 percent

Question ID : 5459279598

Section : General English1

Q.1 Select the word that fills in the blank correctly and completes the sentence meaningfully.

Vani's manager was doubtful ____ her success.





- Ans
- ✗ 1. at
 - ✗ 2. on
 - ✓ 3. of

 4. in

Question ID : 5459279630

Q.2 Select the word segment that substitutes (replaces) the bracketed word segment correctly and completes the sentence meaningfully.

The lane which (connecting) the two cities is deserted.

- Ans
-  1. No correction
 -  2. has connecting
 -  3. connected
 -  4. connects

Question ID : 5459279624

Q.3 Select the word that fills in the blank correctly and completes the sentence meaningfully.

Harsh was _____ in the army.

- Ans
-  1. enlisted
 -  2. endowed
 -  3. engaged
 -  4. eager

Question ID : 5459279632

Q.4 The questions below consist of a set of labelled parts of a sentence. Out of four options given, select the most logical order of the parts which form a coherent sentence.

The city police

P : department reported

Q : of all petty crimes

R : go unreported

S : that approximately 80 percent

- Ans
-  1. QSRP
 -  2. PSQR
 -  3. PRSQ
 -  4. SQRP

Question ID : 5459279634

Q.5 Select the word that fills in the blank correctly and completes the sentence meaningfully.

Mahika jumped ___ from the bed.

- Ans
-  1. at
 -  2. up
 -  3. in
 -  4. on

Question ID : 5459279629

Q.6 In the following statement, one part of the sentence may have an error. Find out which part of the sentence has an error and click the button corresponding to it. If the sentence is free from error, select the "No error" option.

(A) My friends moved/ (B) to a small house/ (C) at the sea./ (D) No error

- Ans
- 1. C
 - 2. B
 - 3. D
 - 4. A

Question ID : 5459279618

Q.7 Select the word segment that substitutes (replaces) the bracketed word segment correctly and completes the sentence meaningfully.

The new manager is bound to (effect) positive changes in the office.

- Ans
- 1. is affecting
 - 2. affect
 - 3. have effecting
 - 4. No correction

Question ID : 5459279621

Q.8 Select the word segment that substitutes (replaces) the bracketed word segment correctly and completes the sentence meaningfully.

Prachi is the (most pretty) girl in the college.

- Ans
- 1. most prettiest
 - 2. No correction
 - 3. prettiest
 - 4. more pretty

Question ID : 5459279622

Q.9 Select the word segment that substitutes (replaces) the bracketed word segment correctly and completes the sentence meaningfully.

Shami is (best) than Chahal.

- Ans
- 1. more good
 - 2. better
 - 3. No correction
 - 4. good

Question ID : 5459279623

Q.10 Select the word that fills in the blank correctly and completes the sentence meaningfully.

Shamita is absorbed ___ reading.

- Ans
- 1. at
 - 2. on
 - 3. to
 - 4. in

Question ID : 5459279628

Q.11 Select the word that fills in the blank correctly and completes the sentence meaningfully.

Rakhi was content ___ her gifts.

- Ans
- 1. at
 - 2. on
 - 3. with
 - 4. to

Question ID : 5459279627

Q.12 Select the word segment that substitutes (replaces) the bracketed word segment correctly and completes the sentence meaningfully.

(Though) of the hardwork, Harsh could not succeed.

- Ans
- 1. Although
 - 2. No correction
 - 3. With
 - 4. In spite

Question ID : 5459279620

Q.13 In the following statement, one part of the sentence may have an error. Find out which part of the sentence has an error and click the button corresponding to it. If the sentence is free from error, select the "No error" option.

(A) They wanted to/ (B) build a new / (C) shed in the garden./ (D) No error

- Ans
- 1. B
 - 2. A
 - 3. D
 - 4. C

Question ID : 5459279615

Q.14 The questions below consist of a set of labelled parts of a sentence. Out of four options given, select the most logical order of the parts which form a coherent sentence.

It has been
P : has a detrimental
Q : found that the
R : effect on the ozone layer
S : use of body spray

- Ans
- 1. SPQR
 - 2. QSPR
 - 3. RSQP
 - 4. PQSR

Question ID : 5459279633

Q.15 In the following statement, one part of the sentence may have an error. Find out which part of the sentence has an error and click the button corresponding to it. If the sentence is free from error, select the "No error" option.

(A) Their meeting/ (B) lasted for/ (C) almost a hour./ (D) No error

- Ans
- 1. D

2. A

3. B

4. C

Question ID : 5459279616

Q.16 In the following statement, one part of the sentence may have an error. Find out which part of the sentence has an error and click the button corresponding to it. If the sentence is free from error, select the "No error" option.

(A) One of the colleague/ (B) was unsure/ (C) about the plan of action./ (D) No error

Ans 1. D

2. B

3. A

4. C

Question ID : 5459279619

Q.17 In the following statement, one part of the sentence may have an error. Find out which part of the sentence has an error and click the button corresponding to it. If the sentence is free from error, select the "No error" option.

(A) Many cafes/ (B) serve complimentary/ (C) mocktail with the meal./ (D) No error

Ans 1. A

2. D

3. B

4. C

examplepundit
Your Success Partner

www.examplepundit.in | pdf.example

Question ID : 5459279617

Q.18 Select the word that fills in the blank correctly and completes the sentence meaningfully.

Veena was _____ to bed with fever.

Ans 1. sticking

2. attached

3. confined

4. lying

Question ID : 5459279625

Q.19 Select the word that fills in the blank correctly and completes the sentence meaningfully.

Sakshi _____ one son and one daughter.

Ans 1. have

2. is

3. has

4. are

Question ID : 5459279626

Q.20 Select the word that fills in the blank correctly and completes the sentence meaningfully.

The manager thought that Vikash ____ fail.

- Ans
- 1. will
 - 2. should
 - 3. must
 - 4. would

Question ID : 5459279631

Section : General English2

Q.1 Select the option that best expresses the meaning of the idiom or phrase given below.

To turn the cover

- Ans
- 1. To pass the crisis
 - 2. To be quick
 - 3. To stop talking and start
 - 4. To keep out of debt

Question ID : 5459279645

Q.2 Select the word that is opposite in meaning ANTONYM to the word given below.

ADJUNCT

- Ans
- 1. Added
 - 2. Fortune
 - 3. Subtracted
 - 4. Forgive

Question ID : 5459279638

Q.3 Select the most appropriate 'one word ' for the expressions given below.

A collection of weapons and military equipment

- Ans
- 1. Archives
 - 2. Arsenal
 - 3. Arena
 - 4. Creche

Question ID : 5459279649

Q.4 Select the most appropriate 'one word ' for the expressions given below.

A strong and fast-moving stream of water or other liquid

- Ans
- 1. Torrent
 - 2. Posse
 - 3. Hamlet
 - 4. Current

Question ID : 5459279648

Q.5 Select the option that best expresses the meaning of the idiom or phrase given below.

To strike one's colours

- Ans
- 1. To listen carefully
 - 2. To make a guess
 - 3. To surrender
 - 4. To be victorious

Question ID : 5459279646

Q.6 The sentences of a paragraph have been jumbled up, and labelled P, Q, R and S. Select the option that gives the correct sequence in which these sentences should be rearranged to form a meaningful paragraph.

The breadth of experimentation must be related to the degree of unknowability that confronts the firm.

P : But the goal is not just to develop perfect strategies that take us in the right direction and then, progressively refine them by rapid experimentation and adjustment.

Q : The more the experimentation, the faster a company can understand precisely which strategies are likely to work.

R : We should spend less time working on strategy as a thing and more time working to understand the secret preconditions that give rise to it.

S : The best way to create wealth for employees and stockholders is to renew our commitment to developing and executing innovative strategies.

Science is closing in on the deep secrets of our life; we must redouble our efforts to close in on the deep secrets of corporate vitality.

- Ans
- 1. PQRS
 - 2. QSPR
 - 3. SQPR
 - 4. RSQP

examplepundit
Your Success Partner

www.examplepundit.in

pr.examplepundit.in

Question ID : 5459279635

Q.7 Select the word that is closest in meaning SYNONYM to the word given below.

ABATE

- Ans
- 1. Increase
 - 2. Flexible
 - 3. Decrease
 - 4. Approve

Question ID : 5459279636

Q.8 Select the most appropriate 'one word' for the expressions given below.

A person appointed by two parties to solve a dispute

- Ans
- 1. Ascetic
 - 2. Arbitrator
 - 3. Atheist
 - 4. Amateur

Question ID : 5459279647

Q.9 Select the word that is opposite in meaning ANTONYM to the word given below.

EFFACE

- Ans 1. Maintain
 2. Uncertain
 3. Cease
 4. Destroy

Question ID : 5459279639

Q.10 Select the word that is closest in meaning **SYNONYM** to the word given below.

PERTURB

- Ans 1. Smart
 2. Worry
 3. Fixed
 4. Happy

Question ID : 5459279637

Q.11 Select the option that best expresses the meaning of the idiom or phrase given below.

To accept the gauntlet

- Ans 1. To be furious
 2. To take reckless risks
 3. To try hard
 4. To accept or respond to a challenge

www.exampundit.in

pdf.exampundit.in

Question ID : 5459279644

Q.12 Select the word that is opposite in meaning **ANTONYM** to the word given below.

DEFILE

- Ans 1. Smart
 2. Purify
 3. Spend
 4. Contaminate

Question ID : 5459279640

Q.13 Four words are given, out of which only one word is spelt correctly. Choose the correctly spelt word.

- Ans 1. Luminiscene
 2. Luminescine
 3. Luminesense
 4. Luminescence

Question ID : 5459279643

Q.14 Four words are given, out of which only one word is spelt correctly. Choose the correctly spelt word.

- Ans
- 1. Acomodation
 - 2. Accommodation
 - 3. Accomodation
 - 4. Acommmodation

Question ID : 5459279641

Q.15 Four words are given, out of which only one word is spelt correctly. Choose the correctly spelt word.

- Ans
- 1. Gulliotine
 - 2. Guilotine
 - 3. Guliotine
 - 4. Guillotine

Question ID : 5459279642

Comprehension:

Read the passage carefully and answer the given questions.

Miss Martha Meacham kept the little bakery on the corner (the one where you go up three steps, and the bell tinkles when you open the door). Miss Martha was forty, her bank-book showed a credit of two thousand dollars, and she possessed two false teeth and a sympathetic heart. Many people have married whose chances to do so were much inferior to Miss Martha's.

Two or three times a week a customer came in whom she began to take an interest. He was a middle-aged man, wearing spectacles and a brown beard trimmed to a careful point. He spoke English with a strong German accent. His clothes were worn and darned in places, and wrinkled and baggy in others. But he looked neat, and had very good manners. He always bought two loaves of stale bread. Fresh bread was five cents a loaf. Stale ones were two for five. Never did he call for anything but stale bread. Once, Miss Martha saw a red and brown stain on his fingers. She was sure then that he was an artist and very poor. No doubt he lived in a garret, where he painted pictures and ate stale bread and thought of the good things to eat in Miss Martha's bakery. Often when Miss Martha sat down to her chops and light rolls and jam and tea she would sigh, and wish that the gentle-mannered artist might share her tasty meal instead of eating his dry crust in that draughty attic. Miss Martha's heart, as you have been told, was a sympathetic one.

SubQuestion No : 16

Q.16 Why did the customer buy stale bread?

- Ans
- 1. He used to buy them for his dog.
 - 2. He loved the taste of it.
 - 3. He was an artist and artists preferred stale bread
 - 4. He was poor and stale breads were cheaper.

Question ID : 5459279655

Comprehension:

Read the passage carefully and answer the given questions.

Miss Martha Meacham kept the little bakery on the corner (the one where you go up three steps, and the bell tinkles when you open the door). Miss Martha was forty, her bank-book showed a credit of two thousand dollars, and she possessed two false teeth and a sympathetic heart. Many people have married whose chances to do so were much inferior to Miss Martha's.

Two or three times a week a customer came in whom she began to take an interest. He was a middle-aged man, wearing spectacles and a brown beard trimmed to a careful point. He spoke English with a strong German accent. His clothes were worn and darned in places, and wrinkled and baggy in others. But he looked neat, and had very good manners. He always

bought two loaves of stale bread. Fresh bread was five cents a loaf. Stale ones were two for five. Never did he call for anything but stale bread. Once, Miss Martha saw a red and brown stain on his fingers. She was sure then that he was an artist and very poor. No doubt he lived in a garret, where he painted pictures and ate stale bread and thought of the good things to eat in Miss Martha's bakery. Often when Miss Martha sat down to her chops and light rolls and jam and tea she would sigh, and wish that the gentle-mannered artist might share her tasty meal instead of eating his dry crust in that draughty attic. Miss Martha's heart, as you have been told, was a sympathetic one.

SubQuestion No : 17

Q.17 The customer who came two or three times a week had a strong _____ accent.

- Ans
- 1. Chinese
 - 2. Indian
 - 3. French
 - 4. German

Question ID : 5459279653

Comprehension:

Read the passage carefully and answer the given questions.

Miss Martha Meacham kept the little bakery on the corner (the one where you go up three steps, and the bell tinkles when you open the door). Miss Martha was forty, her bank-book showed a credit of two thousand dollars, and she possessed two false teeth and a sympathetic heart. Many people have married whose chances to do so were much inferior to Miss Martha's.

Two or three times a week a customer came in whom she began to take an interest. He was a middle-aged man, wearing spectacles and a brown beard trimmed to a careful point. He spoke English with a strong German accent. His clothes were worn and darned in places, and wrinkled and baggy in others. But he looked neat, and had very good manners. He always bought two loaves of stale bread. Fresh bread was five cents a loaf. Stale ones were two for five. Never did he call for anything but stale bread. Once, Miss Martha saw a red and brown stain on his fingers. She was sure then that he was an artist and very poor. No doubt he lived in a garret, where he painted pictures and ate stale bread and thought of the good things to eat in Miss Martha's bakery. Often when Miss Martha sat down to her chops and light rolls and jam and tea she would sigh, and wish that the gentle-mannered artist might share her tasty meal instead of eating his dry crust in that draughty attic. Miss Martha's heart, as you have been told, was a sympathetic one.

SubQuestion No : 18

Q.18 What was the price of the stale bread?

- Ans
- 1. Two for five
 - 2. Five for one
 - 3. Three for five
 - 4. Six for two

Question ID : 5459279654

Comprehension:

Read the passage carefully and answer the given questions.

Miss Martha Meacham kept the little bakery on the corner (the one where you go up three steps, and the bell tinkles when you open the door). Miss Martha was forty, her bank-book showed a credit of two thousand dollars, and she possessed two false teeth and a sympathetic heart. Many people have married whose chances to do so were much inferior to Miss Martha's.

Two or three times a week a customer came in whom she began to take an interest. He was a middle-aged man, wearing spectacles and a brown beard trimmed to a careful point. He spoke English with a strong German accent. His clothes were worn and darned in places, and wrinkled and baggy in others. But he looked neat, and had very good manners. He always bought two loaves of stale bread. Fresh bread was five cents a loaf. Stale ones were two for five. Never did he call for anything but stale bread. Once, Miss Martha saw a red and brown stain on his fingers. She was sure then that he was an artist and very poor. No doubt he lived

in a garret, where he painted pictures and ate stale bread and thought of the good things to eat in Miss Martha's bakery. Often when Miss Martha sat down to her chops and light rolls and jam and tea she would sigh, and wish that the gentle-mannered artist might share her tasty meal instead of eating his dry crust in that draughty attic. Miss Martha's heart, as you have been told, was a sympathetic one.

SubQuestion No : 19

Q.19 Which among the following statements are not true about Miss Martha?

- Ans
- 1. She owned a little bakery
 - 2. Her bank-book showed a credit of one thousand dollars
 - 3. She possessed two false teeth
 - 4. She had a sympathetic heart

Question ID : 5459279652

Comprehension:

Read the passage carefully and answer the given questions.

Miss Martha Meacham kept the little bakery on the corner (the one where you go up three steps, and the bell tinkles when you open the door). Miss Martha was forty, her bank-book showed a credit of two thousand dollars, and she possessed two false teeth and a sympathetic heart. Many people have married whose chances to do so were much inferior to Miss Martha's.

Two or three times a week a customer came in whom she began to take an interest. He was a middle-aged man, wearing spectacles and a brown beard trimmed to a careful point. He spoke English with a strong German accent. His clothes were worn and darned in places, and wrinkled and baggy in others. But he looked neat, and had very good manners. He always bought two loaves of stale bread. Fresh bread was five cents a loaf. Stale ones were two for five. Never did he call for anything but stale bread. Once, Miss Martha saw a red and brown stain on his fingers. She was sure then that he was an artist and very poor. No doubt he lived in a garret, where he painted pictures and ate stale bread and thought of the good things to eat in Miss Martha's bakery. Often when Miss Martha sat down to her chops and light rolls and jam and tea she would sigh, and wish that the gentle-mannered artist might share her tasty meal instead of eating his dry crust in that draughty attic. Miss Martha's heart, as you have been told, was a sympathetic one.

SubQuestion No : 20

Q.20 Miss Martha was _____ years old.

- Ans
- 1. thirty-five
 - 2. thirty
 - 3. fifty
 - 4. forty

Question ID : 5459279651

Section : General Hindi1

Q.1 निम्नलिखित प्रश्न में, चार विकल्पों में से, उस विकल्प का चयन करें जो कोष्ठक में दिए गए शब्द के अनुसार अन्य पुरुष वाचक सर्वनाम का सही विकल्प हो।

- Ans
- 1. (तुम) जल्दी करो।
 - 2. (वे लोग) कभी भी आते होंगे।
 - 3. (मैंने) आज बहुत काम किया है।
 - 4. (मैं) सोने जा रहा हूँ।

Question ID : 5459279675

Q.2 निम्नलिखित प्रश्न में, चार विकल्पों में से, उस विकल्प का चयन करें जो दिए गए शब्द के विलोम शब्द का सही विकल्प है।

सामिष

- Ans
- 1. अमिश
 - 2. निरामिष
 - 3. आमिष
 - 4. सहित

Question ID : 5459279664

Q.3 निम्नलिखित प्रश्न में, चार विकल्पों में से, उस विकल्प का चयन करें जो दिए गए शब्द का स्त्रीलिंग शब्द वाला विकल्प है।

वृद्ध

- Ans
- 1. वृद्धि
 - 2. वृद्धा
 - 3. वृद्धी
 - 4. वृद्धिय

Question ID : 5459279672

Q.4 निम्नलिखित प्रश्न में, चार विकल्पों में से, उस विकल्प का चयन करें जो दिए गए वाक्यांश के लिए एक शब्द का सही विकल्प है।

अनिश्चित जीविका वाला

- Ans
- 1. आकाशवृत्ति
 - 2. आडम्बर
 - 3. आकस्मिक
 - 4. असपृश्य

Question ID : 5459279666

Q.5 निम्नलिखित प्रश्न में, चार विकल्पों में से, उस विकल्प का चयन करें जो शुद्ध शब्द का सही विकल्प है।

- Ans
- 1. सहस्त्रबाहू
 - 2. सहस्त्रबहू
 - 3. सहसताबहू
 - 4. सहस्त्रबाहु

Question ID : 5459279670

Q.6 निम्नलिखित प्रश्न में, चार विकल्पों में से, उस विकल्प का चयन करें जो समूहवाचक संज्ञा का सही विकल्प है।

- Ans
- 1. गर्व
 - 2. सौंदर्य
 - 3. कर्मचारी
 - 4. पानी

Question ID : 5459279658

Q.7 निम्नलिखित प्रश्न में, चार विकल्पों में से, उस सही विकल्प का चयन करें जो रिक्त स्थान के लिए उचित विकल्प हो

वह _____ बहुत मेहनती लगता है।

- Ans
- 1. पूरूष
 - 2. पुरुष
 - 3. परुष
 - 4. पौरुष

Question ID : 5459279667

Q.8 निम्नलिखित प्रश्न में, चार विकल्पों में से, उस विकल्प का चयन करें जो दिए गए शब्द के समानार्थी शब्द का विकल्प नहीं है।

पहेली

- Ans
- 1. अभिमत
 - 2. कूटप्रश्न
 - 3. मुकरी
 - 4. प्रहेलिका

Question ID : 5459279668

Q.9 निम्नलिखित प्रश्न में, चार विकल्पों में से, उस विकल्प का चयन करें जो कोष्ठक में दिए गए शब्द के अनुसार विशेषण के भेद वाला विकल्प हो।

(थोड़ा) आटा गरीबों को दे दो।

- Ans
- 1. संख्यावाचक
 - 2. सार्वनामिक
 - 3. गुणवाचक
 - 4. परिमाणवाचक

Question ID : 5459279660

Q.10 निम्नलिखित प्रश्न में, चार विकल्पों में से, उस विकल्प का चयन करें जो दिए गए शब्द के पर्यायवाची शब्द का सही विकल्प नहीं है।

अंक

- Ans
- 1. संख्या
 - 2. चिन्ह
 - 3. कोशिश
 - 4. गोद

Question ID : 5459279661

Q.11 निम्नलिखित प्रश्न में, चार विकल्पों में से, उस विकल्प का चयन करें जो दिए गए शब्द के पर्यायवाची शब्द का सही विकल्प नहीं है।

अध्ययन

- Ans
- 1. अवलोकन
 - 2. विलक्षण
 - 3. अनुशीलन

✗ 4. परायण

Question ID : 5459279662

Q.12 निम्नलिखित प्रश्न में, चार विकल्पों में से, उस सही विकल्प का चयन करें जो रिक्त स्थान के लिए उपयुक्त शब्द का सही विकल्प है।

आठ बजने _____ दस मिनट हैं।

- Ans
- ✗ 1. से
 - ✓ 2. में
 - ✗ 3. पर
 - ✗ 4. को

Question ID : 5459279669

Q.13 निम्नलिखित प्रश्न में, चार विकल्पों में से, उस सही विकल्प का चयन करें जो दिए गए शब्द-युग्म के अर्थ का सही विकल्प हो।

अमर्ष-अवमर्ष

- Ans
- ✓ 1. क्रोध और आलोचना
 - ✗ 2. आवश्यकता और आलोचना
 - ✗ 3. सलाह और आलोचना
 - ✗ 4. क्रोध और सलाह

Question ID : 5459279665

Q.14 निम्नलिखित प्रश्न में, चार विकल्पों में से, उस विकल्प का चयन करें जो दिए गए सही संधि विच्छेद की संधि का सही विकल्प हो।

श्रद्धा + आनंद

- Ans
- ✗ 1. श्रद्धानंद
 - ✗ 2. श्रद्धाआनंद
 - ✓ 3. श्रद्धानंद
 - ✗ 4. श्रद्धंद

Question ID : 5459279656

Q.15 निम्नलिखित प्रश्न में, चार विकल्पों में से, उस विकल्प का चयन करें जो सदा एकवचन शब्द का सबसे अच्छा विकल्प है।

- Ans
- ✗ 1. अश्रु
 - ✗ 2. दाम
 - ✓ 3. पानी
 - ✗ 4. आशीर्वाद

Question ID : 5459279673

Q.16 निम्नलिखित प्रश्न में, चार विकल्पों में से, उस विकल्प का चयन करें जो सदा पुल्लिंग वाला शब्द है।

- Ans
- ✗ 1. मगही
 - ✓ 2. समाज

✗ 3. अग्रजा

✗ 4. तमिल

Question ID : 5459279671

Q.17 निम्नलिखित प्रश्न में, चार विकल्पों में से, उस विकल्प का चयन करें जो दिए गए शब्द के विलोम शब्द का सही विकल्प है।

प्रवृत्ति

Ans ✗ 1. निवारण

✗ 2. रुझान

✓ 3. निवृत्ति

✗ 4. बहाव

Question ID : 5459279663

Q.18 निम्नलिखित प्रश्न में, चार विकल्पों में से, उस विकल्प का चयन करें जो दिए गए शब्द के बहुवचन शब्द का सबसे अच्छा विकल्प है।

गाथा

Ans ✗ 1. गाथाओ

✓ 2. गाथाएँ

✗ 3. गाथावों

✗ 4. गाथाये

Question ID : 5459279674

Q.19 निम्नलिखित प्रश्न में, चार विकल्पों में से, उस विकल्प का चयन करें जो दिए गए शब्द के सही संधि विच्छेद का विकल्प हो।

अधिकांश

Ans ✗ 1. अधि + कंश

✗ 2. अधि + कांश

✗ 3. अधिक + आंश

✓ 4. अधिक+ अंश

Question ID : 5459279657

Q.20 निम्नलिखित प्रश्न में, चार विकल्पों में से, उस विकल्प का चयन करें जो कोष्ठक में दिए गए शब्द के अनुसार सर्वनाम के भेद का सही विकल्प हो।

(जो) अच्छा काम करेगा (वो) पुरस्कार पाएगा।

Ans ✓ 1. संबंधवाचक सर्वनाम

✗ 2. अनिश्चयवाचक सर्वनाम

✗ 3. निश्चय वाचक सर्वनाम

✗ 4. प्रश्नवाचक सर्वनाम

Question ID : 5459279659

Q.1 निम्न विकल्पों में से निर्देशानुसार वाच्य परिवर्तन का विकल्प चुनिए।

मानसी दिल्ली जा रही है (कर्मवाच्य)

- Ans
- 1. मानसी दिल्ली गई
 - 2. मानसी द्वारा दिल्ली जाया जा रहा है
 - 3. दिल्ली मानसी जा रही है
 - 4. दिल्ली मानसी गई

Question ID : 5459279679

Q.2 निम्नलिखित प्रश्न में, चार विकल्पों में से, उस विकल्प का चयन करें जो दिए गए वाक्य के लिए वृत्ति के भेद का सबसे अच्छा विकल्प है।

खाना तैयार हो चुका है।

- Ans
- 1. संकेतार्थ
 - 2. निश्चयार्थ
 - 3. संदेहार्थ
 - 4. विध्यर्थ

Question ID : 5459279677

Q.3 निम्नलिखित प्रश्न में, चार विकल्पों में से, उस विकल्प का चयन करें जो दिए गए वाक्य के लिए पक्ष के भेद का सबसे अच्छा विकल्प है।

अब सब्जियाँ सस्ती होने लगी हैं!

- Ans
- 1. नित्यताद्योतक
 - 2. आरंभद्योतक
 - 3. सातप्यबोधक
 - 4. प्रगतिद्योतक

Question ID : 5459279678

Q.4 निम्नलिखित प्रश्न में, चार विकल्पों में से, उस विकल्प का चयन करें जो दिए गए वाक्य के काल के भेद का सही विकल्प हो।

दीपा ने खीर बनाई।

- Ans
- 1. हेतुहेतु मद् भूतकाल
 - 2. हेतुहेतुमद् भविष्यत् काल
 - 3. पूर्ण भूतकाल
 - 4. अपूर्ण भूतकाल

Question ID : 5459279676

Q.5 निम्नलिखित प्रश्न में, चार विकल्पों में से, उस विकल्प का चयन करें जो सही वाक्य भेद का विकल्प हो।

कल हम खेलने जाएँगे।

- Ans
- 1. मिश्र वाक्य
 - 2. संयुक्त वाक्य

3. निषेधवाचक वाक्य

4. सरल वाक्य

Question ID : 5459279680

Q.6 निम्नलिखित प्रश्न में, चार विकल्पों में से, उस विकल्प का चयन करें जो सही वाक्य भेद का विकल्प हो।

जो मेहनत करता है, वह सब कुछ पा सकता है।

Ans 1. संयुक्त वाक्य

2. संकेतवाचक वाक्य

3. मिश्र वाक्य

4. संदेहवाचक वाक्य

Question ID : 5459279681

Q.7 निम्नलिखित प्रश्न में, चार विकल्पों में से, उस विकल्प का चयन करें जो दी गई लोकोक्ति के लिए सही अर्थ वाला विकल्प है।

आगे कुआँ पीछे खाई

Ans 1. अच्छे के साथ अच्छा

2. कमियाँ होना

3. चारों तरफ से विपत्ति आना

4. दोहरा लाभ

Question ID : 5459279688

Q.8 निम्नलिखित प्रश्न में, चार विकल्पों में से, उस विकल्प का चयन करें जो सही वाक्य भेद का विकल्प हो।

दीपा ने उसे बहुत दूँडा पर वह नहीं मिला।

Ans 1. विधानवाचक वाक्य

2. सरल वाक्य

3. मिश्र वाक्य

4. संयुक्त वाक्य

Question ID : 5459279682

Q.9 निम्नलिखित प्रश्न में, चार विकल्पों में से, उस विकल्प का चयन करें जो विराम चिह्न युक्त वाक्य का सही विकल्प हो।

Ans 1. खेलना तो मुझे भी था? परंतु थकान की वजह से खेल नहीं सकी।

2. खेलना तो मुझे भी था; "परंतु थकान की वजह से खेल नहीं सकी।"

3. खेलना तो मुझे भी था; परंतु थकान की वजह से खेल नहीं सकी।

4. खेलना तो मुझे भी था! परंतु थकान की वजह से खेल नहीं सकी।

Question ID : 5459279683

Q.10 निम्नलिखित प्रश्न में, चार विकल्पों में से, उस विकल्प का चयन करें जो दिए गए मुहावरे के लिए सही अर्थ वाला विकल्प है।

आपे से बाहर होना

Ans 1. होश ठिकाने आना

- 2. बिना सोचे काम करना
- 3. क्रोधित होना
- 4. बाहर जाना

Question ID : 5459279687

Q.11 निम्नलिखित प्रश्न में, चार विकल्पों में से, उस विकल्प का चयन करें जो दिए गए मुहावरे के लिए सही अर्थ वाला विकल्प है।

अंतड़ियाँ कुलबुलाना

- Ans
- 1. पीछे हटना
 - 2. खुजली होना
 - 3. अधिक भूख लगना
 - 4. दर्द होना

Question ID : 5459279686

Q.12 निम्नलिखित प्रश्न में, चार विकल्पों में से, उस विकल्प का चयन करें जो दिए गए मुहावरे के लिए सही अर्थ वाला विकल्प है।

अंकुश रखना

- Ans
- 1. दबाव में रखना
 - 2. थक जाना
 - 3. विकसित होना
 - 4. अविकसित

Question ID : 5459279685

Q.13 निम्नलिखित प्रश्न में, चार विकल्पों में से, उस सही विकल्प का चयन करें जो दी गई लोकोक्ति के लिए सही अर्थ वाला विकल्प है।

बीती ताहि बिसार दे

- Ans
- 1. जो बीत गया, उसे भूल जाना चाहिए
 - 2. कुछ भी भूलता नहीं
 - 3. सबको भूल जाना
 - 4. किसी से भी शत्रुता न करना

Question ID : 5459279690

Q.14 निम्नलिखित प्रश्न में, चार विकल्पों में से, उस विकल्प का चयन करें जो दी गई लोकोक्ति के लिए सही अर्थ वाला विकल्प है।

थोथा चना बाजे घना

- Ans
- 1. बलवान की ही जीत होती है
 - 2. अधिक परिश्रम कम फल
 - 3. ओछा व्यक्ति सदा दिखावा करता है
 - 4. कंजूस होना

Question ID : 5459279689

Q.15 निम्नलिखित प्रश्न में, चार विकल्पों में से, उस विकल्प का चयन करें जो विराम चिह्न युक्त वाक्य का सही विकल्प हो।

- Ans
- 1. वह अपराधी है? फिर भी, उसे सजा नहीं मिली?
 - 2. वह अपराधी है फिर भी, उसे सजा नहीं मिली?
 - 3. वह अपराधी है! फिर भी, उसे सजा नहीं मिली!
 - 4. वह अपराधी है फिर भी, उसे सजा नहीं मिली।

Question ID : 5459279684

Comprehension:

नीचे दिए गये गद्यांश को ध्यानपूर्वक पढ़ें और प्रश्न का सर्वोत्तम उत्तर चुनें।

भारतीय दर्शन सिखाता है कि जीवन एक आशय और लक्ष्य है, उस आशय की खोज हमारा दायित्व है और अंत में उस लक्ष्य को प्राप्त कर लेना हमारा विशेष अधिकार है। इस प्रकार दर्शन वह है जो कि आशय को उद्घाटित करने की कोशिश करता है और जहाँ तक उसे इसमें सफलता मिलती है, वह इस लक्ष्य तक अग्रसर होने की प्रक्रिया करता है, कुल मिलाकर आखिर यह लक्ष्य क्या है? इस अर्थ में यथार्थ की प्राप्ति वह है जिसमें पा लेना, केवल जानना नहीं है, बल्कि उसी का अंश हो जाना है। इस उपलब्धि में बाधा क्या है? बाधाएँ कई हैं, पर इनमें प्रमुख है-अज्ञान। अशिक्षित आत्मा नहीं है, यहाँ तक कि यथार्थ संसार भी नहीं है। यह दर्शन ही है जो उसे शिक्षित करता है और अपनी शिक्षा से उसे उस अज्ञान से मुक्ति दिलाता है, जो यथार्थ दर्शन नहीं होने देता। इस प्रकार एक दार्शनिक होना एक बौद्धिक अनुगमन करना नहीं, बल्कि एक शक्तिप्रद अनुशासन पर चलना है, क्योंकि सत्य की खोज में लगे हुए सही दार्शनिक को अपने जीवन को इस प्रकार आचरित करना पड़ता है ताकि उस यथार्थ से एकाकार हो जाए जिसे वह खोज रहा है। वास्तव में, यही जीवन का एकमात्र सही मार्ग है और सभी दार्शनिकों को ही नहीं, बल्कि सभी मनुष्यों को, इसका पालन करना होता है, क्योंकि सभी मनुष्यों के दायित्व और निर्यात एक ही हैं।

SubQuestion No : 16

Q.16 इनमें से कौन - सा आशय शब्द का पर्यायवाची शब्द नहीं है?

- Ans
- 1. अभिप्राय
 - 2. तात्पर्य
 - 3. उद्देश्य
 - 4. एकाकार

exam pundit
Your Success Partner
www.exampundit.in pdf.exampundit.in

Question ID : 5459279695

Comprehension:

नीचे दिए गये गद्यांश को ध्यानपूर्वक पढ़ें और प्रश्न का सर्वोत्तम उत्तर चुनें।

भारतीय दर्शन सिखाता है कि जीवन एक आशय और लक्ष्य है, उस आशय की खोज हमारा दायित्व है और अंत में उस लक्ष्य को प्राप्त कर लेना हमारा विशेष अधिकार है। इस प्रकार दर्शन वह है जो कि आशय को उद्घाटित करने की कोशिश करता है और जहाँ तक उसे इसमें सफलता मिलती है, वह इस लक्ष्य तक अग्रसर होने की प्रक्रिया करता है, कुल मिलाकर आखिर यह लक्ष्य क्या है? इस अर्थ में यथार्थ की प्राप्ति वह है जिसमें पा लेना, केवल जानना नहीं है, बल्कि उसी का अंश हो जाना है। इस उपलब्धि में बाधा क्या है? बाधाएँ कई हैं, पर इनमें प्रमुख है-अज्ञान। अशिक्षित आत्मा नहीं है, यहाँ तक कि यथार्थ संसार भी नहीं है। यह दर्शन ही है जो उसे शिक्षित करता है और अपनी शिक्षा से उसे उस अज्ञान से मुक्ति दिलाता है, जो यथार्थ दर्शन नहीं होने देता। इस प्रकार एक दार्शनिक होना एक बौद्धिक अनुगमन करना नहीं, बल्कि एक शक्तिप्रद अनुशासन पर चलना है, क्योंकि सत्य की खोज में लगे हुए सही दार्शनिक को अपने जीवन को इस प्रकार आचरित करना पड़ता है ताकि उस यथार्थ से एकाकार हो जाए जिसे वह खोज रहा है। वास्तव में, यही जीवन का एकमात्र सही मार्ग है और सभी दार्शनिकों को ही नहीं, बल्कि सभी मनुष्यों को, इसका पालन करना होता है, क्योंकि सभी मनुष्यों के दायित्व और निर्यात एक ही हैं।

SubQuestion No : 17

Q.17 इस अनुच्छेद का कोई उपयुक्त शीर्षक:

- Ans
- 1. सत्य की खोज
 - 2. दार्शनिकता
 - 3. भारतीय दर्शन
 - 4. दर्शन

Question ID : 5459279696

Comprehension:

नीचे दिए गये गद्यांश को ध्यानपूर्वक पढ़ें और प्रश्न का सर्वोत्तम उत्तर चुनें।

भारतीय दर्शन सिखाता है कि जीवन एक आशय और लक्ष्य है, उस आशय की खोज हमारा दायित्व है और अंत में उस लक्ष्य को प्राप्त कर लेना हमारा विशेष अधिकार है। इस प्रकार दर्शन वह है जो कि आशय को उद्घाटित करने की कोशिश करता है और जहाँ तक उसे इसमें सफलता मिलती है, वह इस लक्ष्य तक अग्रसर होने की प्रक्रिया करता है, कुल मिलाकर आखिर यह लक्ष्य क्या है? इस अर्थ में यथार्थ की प्राप्ति वह है जिसमें पा लेना, केवल जानना नहीं है, बल्कि उसी का अंश हो जाना है। इस उपलब्धि में बाधा क्या है? बाधाएँ कई हैं, पर इनमें प्रमुख है-अज्ञान। अशिक्षित आत्मा नहीं है, यहाँ तक कि यथार्थ संसार भी नहीं है। यह दर्शन ही है जो उसे शिक्षित करता है और अपनी शिक्षा से उसे उस अज्ञान से मुक्ति दिलाता है, जो यथार्थ दर्शन नहीं होने देता। इस प्रकार एक दार्शनिक होना एक बौद्धिक अनुगमन करना नहीं, बल्कि एक शक्तिप्रद अनुशासन पर चलना है, क्योंकि सत्य की खोज में लगे हुए सही दार्शनिक को अपने जीवन को इस प्रकार आचरित करना पड़ता है ताकि उस यथार्थ से एकाकार हो जाए जिसे वह खोज रहा है। वास्तव में, यही जीवन का एकमात्र सही मार्ग है और सभी दार्शनिकों को ही नहीं, बल्कि सभी मनुष्यों को, इसका पालन करना होता है, क्योंकि सभी मनुष्यों के दायित्व और निर्यात एक ही हैं।

SubQuestion No : 18

Q.18 भारतीय दर्शन किस लक्ष्य की ओर संकेत करता है?

- Ans
- 1. यथार्थ के साथ एकाकार हो जाना
 - 2. यथार्थ की प्राप्ति कार लेना
 - 3. शिक्षित हो जाना
 - 4. जीवन का एक आशय और एक लक्ष्य है

Question ID : 5459279692

Comprehension:

नीचे दिए गये गद्यांश को ध्यानपूर्वक पढ़ें और प्रश्न का सर्वोत्तम उत्तर चुनें।

भारतीय दर्शन सिखाता है कि जीवन एक आशय और लक्ष्य है, उस आशय की खोज हमारा दायित्व है और अंत में उस लक्ष्य को प्राप्त कर लेना हमारा विशेष अधिकार है। इस प्रकार दर्शन वह है जो कि आशय को उद्घाटित करने की कोशिश करता है और जहाँ तक उसे इसमें सफलता मिलती है, वह इस लक्ष्य तक अग्रसर होने की प्रक्रिया करता है, कुल मिलाकर आखिर यह लक्ष्य क्या है? इस अर्थ में यथार्थ की प्राप्ति वह है जिसमें पा लेना, केवल जानना नहीं है, बल्कि उसी का अंश हो जाना है। इस उपलब्धि में बाधा क्या है? बाधाएँ कई हैं, पर इनमें प्रमुख है-अज्ञान। अशिक्षित आत्मा नहीं है, यहाँ तक कि यथार्थ संसार भी नहीं है। यह दर्शन ही है जो उसे शिक्षित करता है और अपनी शिक्षा से उसे उस अज्ञान से मुक्ति दिलाता है, जो यथार्थ दर्शन नहीं होने देता। इस प्रकार एक दार्शनिक होना एक बौद्धिक अनुगमन करना नहीं, बल्कि एक शक्तिप्रद अनुशासन पर चलना है, क्योंकि सत्य की खोज में लगे हुए सही दार्शनिक को अपने जीवन को इस प्रकार आचरित करना पड़ता है ताकि उस यथार्थ से एकाकार हो जाए जिसे वह खोज रहा है। वास्तव में, यही जीवन का एकमात्र सही मार्ग है और सभी दार्शनिकों को ही नहीं, बल्कि सभी मनुष्यों को, इसका पालन करना होता है, क्योंकि सभी मनुष्यों के दायित्व और निर्यात एक ही हैं।

SubQuestion No : 19

Q.19 जीवन का एकमात्र उद्देश्य क्या है?

- Ans
- 1. शिक्षित होना
 - 2. बौद्धिक अनुगमन करना
 - 3. अज्ञान से मुक्त होना
 - 4. शक्तिप्रद अनुशासन पर चलना

Question ID : 5459279694

Comprehension:

नीचे दिए गये गद्यांश को ध्यानपूर्वक पढ़ें और प्रश्न का सर्वोत्तम उत्तर चुनें।

भारतीय दर्शन सिखाता है कि जीवन एक आशय और लक्ष्य है, उस आशय की खोज हमारा दायित्व है और अंत में उस लक्ष्य को प्राप्त कर लेना हमारा विशेष अधिकार है। इस प्रकार दर्शन वह है जो कि आशय को उद्घाटित करने की कोशिश करता है और जहाँ तक उसे इसमें सफलता मिलती है, वह इस लक्ष्य तक अग्रसर होने की प्रक्रिया करता है, कुल मिलाकर आखिर यह लक्ष्य क्या है? इस अर्थ में यथार्थ की प्राप्ति वह है जिसमें पा लेना, केवल जानना नहीं है, बल्कि उसी का अंश हो जाना है। इस उपलब्धि में बाधा क्या है? बाधाएँ कई हैं, पर इनमें प्रमुख है-अज्ञान। अशिक्षित आत्मा नहीं है, यहाँ तक कि यथार्थ संसार भी नहीं है। यह दर्शन ही है जो उसे शिक्षित करता है और अपनी शिक्षा से उसे उस अज्ञान से मुक्ति दिलाता है, जो यथार्थ दर्शन नहीं होने देता। इस प्रकार एक दार्शनिक होना एक बौद्धिक अनुगमन करना नहीं, बल्कि एक शक्तिप्रद

अनुशासन पर चलना है, क्योंकि सत्य की खोज में लगे हुए सही दार्शनिक को अपने जीवन को इस प्रकार आचरित करना पड़ता है ताकि उस यथार्थ से एकाकार हो जाए जिसे वह खोज रहा है। वास्तव में, यही जीवन का एकमात्र सही मार्ग है और सभी दार्शनिकों को ही नहीं, बल्कि सभी मनुष्यों को, इसका पालन करना होता है, क्योंकि सभी मनुष्यों के दायित्व और नियंत्रण एक ही हैं।

SubQuestion No : 20

Q.20 लक्ष्य प्राप्त करने में प्रमुख बाँधा क्या है?

- Ans**
- 1. यथार्थ दर्शन
 - 2. ज्ञान का अभाव
 - 3. शिक्षित होना
 - 4. अनुशासनहीनता

Question ID : 5459279693

exampundit
Your Success Partner

www.exampundit.in

pdf.exampundit.in